



Determine which letter BEST represents the shapes that were used to create the figure shown.

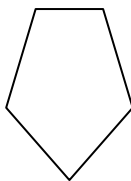
Answers

1)



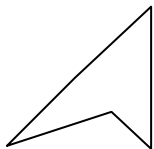
- A. pentagon & square
- B. rectangle & square
- C. heptagon & octagon
- D. triangle & rectangle

2)



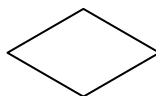
- A. triangle & octagon
- B. pentagon & hexagon
- C. quadrilateral & triangle
- D. octagon & pentagon

3)



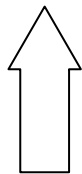
- A. rectangle & heptagon
- B. quadrilateral & rectangle
- C. triangle & triangle
- D. heptagon & octagon

4)



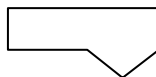
- A. octagon & heptagon
- B. triangle & triangle
- C. quadrilateral & square
- D. triangle & square

5)



- A. square & rectangle
- B. heptagon & square
- C. pentagon & heptagon
- D. triangle & quadrilateral

6)



- A. octagon & quadrilateral
- B. square & triangle
- C. rectangle & triangle
- D. octagon & triangle

7)



- A. rectangle & square
- B. triangle & quadrilateral
- C. heptagon & octagon
- D. octagon & pentagon

8)



- A. octagon & quadrilateral
- B. octagon & heptagon
- C. quadrilateral & hexagon
- D. pentagon & hexagon

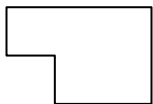
- 1. _____
- 2. _____
- 3. _____
- 4. _____
- 5. _____
- 6. _____
- 7. _____
- 8. _____



Determine which letter BEST represents the shapes that were used to create the figure shown.

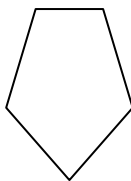
Answers

1)



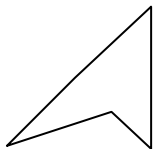
- A. pentagon & square
- B. rectangle & square
- C. heptagon & octagon
- D. triangle & rectangle

2)



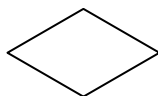
- A. triangle & octagon
- B. pentagon & hexagon
- C. quadrilateral & triangle
- D. octagon & pentagon

3)



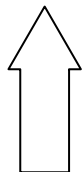
- A. rectangle & heptagon
- B. quadrilateral & rectangle
- C. triangle & triangle
- D. heptagon & octagon

4)



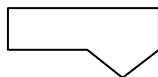
- A. octagon & heptagon
- B. triangle & triangle
- C. quadrilateral & square
- D. triangle & square

5)



- A. square & rectangle
- B. heptagon & square
- C. pentagon & heptagon
- D. triangle & quadrilateral

6)



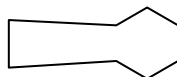
- A. octagon & quadrilateral
- B. square & triangle
- C. rectangle & triangle
- D. octagon & triangle

7)



- A. rectangle & square
- B. triangle & quadrilateral
- C. heptagon & octagon
- D. octagon & pentagon

8)



- A. octagon & quadrilateral
- B. octagon & heptagon
- C. quadrilateral & hexagon
- D. pentagon & hexagon

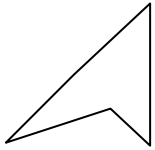
- 1. **B**
- 2. **C**
- 3. **C**
- 4. **B**
- 5. **D**
- 6. **C**
- 7. **B**
- 8. **C**



Determine which letter BEST represents the shapes that were used to create the figure shown.

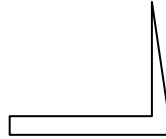
Answers

1)



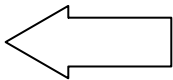
- A. heptagon & hexagon
- B. triangle & hexagon
- C. triangle & triangle
- D. rectangle & heptagon

2)



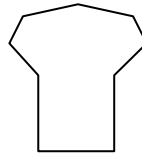
- A. heptagon & triangle
- B. quadrilateral & triangle
- C. square & hexagon
- D. heptagon & pentagon

3)



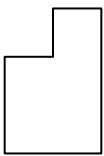
- A. square & heptagon
- B. triangle & rectangle
- C. hexagon & square
- D. quadrilateral & octagon

4)



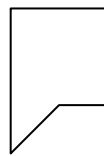
- A. heptagon & pentagon
- B. triangle & hexagon
- C. rectangle & octagon
- D. rectangle & heptagon

5)



- A. square & triangle
- B. octagon & hexagon
- C. square & square
- D. triangle & quadrilateral

6)



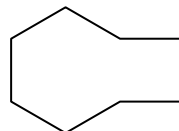
- A. square & triangle
- B. octagon & rectangle
- C. octagon & hexagon
- D. heptagon & triangle

7)



- A. pentagon & rectangle
- B. octagon & heptagon
- C. pentagon & quadrilateral
- D. rectangle & triangle

8)



- A. triangle & hexagon
- B. square & octagon
- C. rectangle & quadrilateral
- D. quadrilateral & hexagon

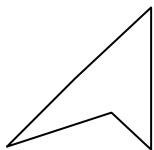
- 1. _____
- 2. _____
- 3. _____
- 4. _____
- 5. _____
- 6. _____
- 7. _____
- 8. _____



Determine which letter BEST represents the shapes that were used to create the figure shown.

Answers

1)



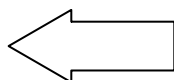
- A. heptagon & hexagon
- B. triangle & hexagon
- C. triangle & triangle
- D. rectangle & heptagon

2)



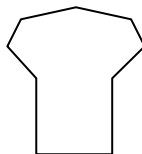
- A. heptagon & triangle
- B. quadrilateral & triangle
- C. square & hexagon
- D. heptagon & pentagon

3)



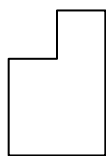
- A. square & heptagon
- B. triangle & rectangle
- C. hexagon & square
- D. quadrilateral & octagon

4)



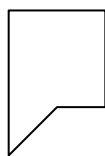
- A. heptagon & pentagon
- B. triangle & hexagon
- C. rectangle & octagon
- D. rectangle & heptagon

5)



- A. square & triangle
- B. octagon & hexagon
- C. square & square
- D. triangle & quadrilateral

6)



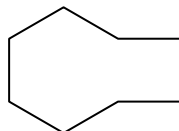
- A. square & triangle
- B. octagon & rectangle
- C. octagon & hexagon
- D. heptagon & triangle

7)



- A. pentagon & rectangle
- B. octagon & heptagon
- C. pentagon & quadrilateral
- D. rectangle & triangle

8)



- A. triangle & hexagon
- B. square & octagon
- C. rectangle & quadrilateral
- D. quadrilateral & hexagon

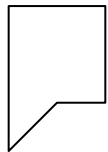
- 1. **C**
- 2. **B**
- 3. **B**
- 4. **D**
- 5. **C**
- 6. **A**
- 7. **D**
- 8. **D**



Determine which letter BEST represents the shapes that were used to create the figure shown.

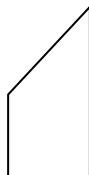
Answers

1)



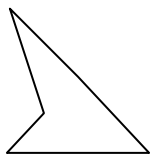
- A. square & triangle
- B. hexagon & rectangle
- C. rectangle & square
- D. heptagon & hexagon

2)



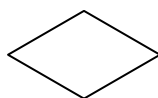
- A. triangle & quadrilateral
- B. octagon & triangle
- C. octagon & rectangle
- D. triangle & hexagon

3)



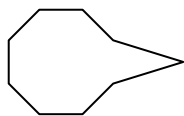
- A. hexagon & octagon
- B. triangle & triangle
- C. square & pentagon
- D. hexagon & quadrilateral

4)



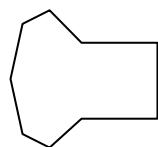
- A. hexagon & triangle
- B. triangle & triangle
- C. square & pentagon
- D. square & heptagon

5)



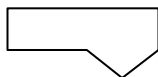
- A. octagon & rectangle
- B. triangle & octagon
- C. rectangle & quadrilateral
- D. quadrilateral & square

6)



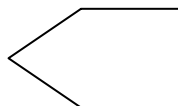
- A. pentagon & quadrilateral
- B. pentagon & triangle
- C. quadrilateral & heptagon
- D. rectangle & square

7)



- A. triangle & octagon
- B. octagon & rectangle
- C. rectangle & triangle
- D. quadrilateral & heptagon

8)



- A. pentagon & triangle
- B. square & triangle
- C. rectangle & octagon
- D. hexagon & quadrilateral

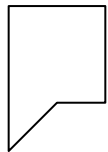
- 1. _____
- 2. _____
- 3. _____
- 4. _____
- 5. _____
- 6. _____
- 7. _____
- 8. _____



Determine which letter BEST represents the shapes that were used to create the figure shown.

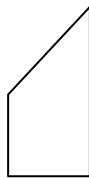
Answers

1)



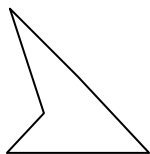
- A. square & triangle
- B. hexagon & rectangle
- C. rectangle & square
- D. heptagon & hexagon

2)



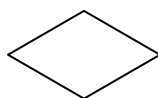
- A. triangle & quadrilateral
- B. octagon & triangle
- C. octagon & rectangle
- D. triangle & hexagon

3)



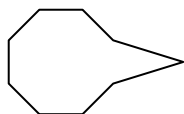
- A. hexagon & octagon
- B. triangle & triangle
- C. square & pentagon
- D. hexagon & quadrilateral

4)



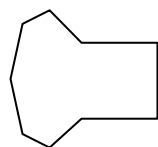
- A. hexagon & triangle
- B. triangle & triangle
- C. square & pentagon
- D. square & heptagon

5)



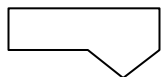
- A. octagon & rectangle
- B. triangle & octagon
- C. rectangle & quadrilateral
- D. quadrilateral & square

6)



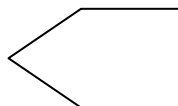
- A. pentagon & quadrilateral
- B. pentagon & triangle
- C. quadrilateral & heptagon
- D. rectangle & square

7)



- A. triangle & octagon
- B. octagon & rectangle
- C. rectangle & triangle
- D. quadrilateral & heptagon

8)



- A. pentagon & triangle
- B. square & triangle
- C. rectangle & octagon
- D. hexagon & quadrilateral

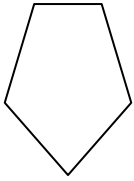
- 1. **A**
- 2. **A**
- 3. **B**
- 4. **B**
- 5. **B**
- 6. **C**
- 7. **C**
- 8. **B**



Determine which letter BEST represents the shapes that were used to create the figure shown.

Answers

1)



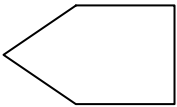
- A. square & hexagon
- B. octagon & quadrilateral
- C. quadrilateral & triangle
- D. octagon & triangle

2)



- A. octagon & heptagon
- B. octagon & triangle
- C. rectangle & square
- D. rectangle & octagon

3)



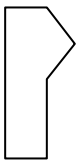
- A. rectangle & pentagon
- B. quadrilateral & triangle
- C. pentagon & hexagon
- D. octagon & rectangle

4)



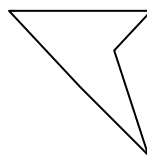
- A. triangle & heptagon
- B. quadrilateral & hexagon
- C. rectangle & quadrilateral
- D. octagon & triangle

5)



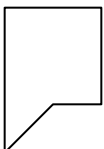
- A. pentagon & square
- B. pentagon & rectangle
- C. octagon & quadrilateral
- D. rectangle & triangle

6)



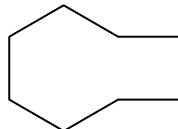
- A. quadrilateral & rectangle
- B. triangle & octagon
- C. triangle & triangle
- D. hexagon & heptagon

7)



- A. rectangle & triangle
- B. pentagon & octagon
- C. rectangle & heptagon
- D. pentagon & hexagon

8)



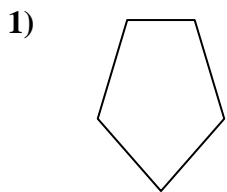
- A. square & pentagon
- B. quadrilateral & rectangle
- C. pentagon & rectangle
- D. rectangle & hexagon

- 1. _____
- 2. _____
- 3. _____
- 4. _____
- 5. _____
- 6. _____
- 7. _____
- 8. _____

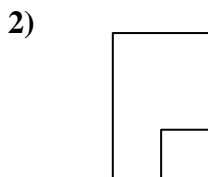


Determine which letter BEST represents the shapes that were used to create the figure shown.

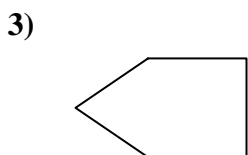
Answers



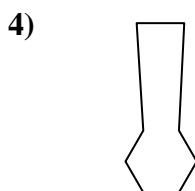
- A. square & hexagon
- B. octagon & quadrilateral
- C. quadrilateral & triangle
- D. octagon & triangle



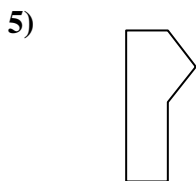
- A. octagon & heptagon
- B. octagon & triangle
- C. rectangle & square
- D. rectangle & octagon



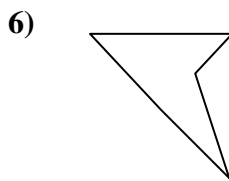
- A. rectangle & pentagon
- B. quadrilateral & triangle
- C. pentagon & hexagon
- D. octagon & rectangle



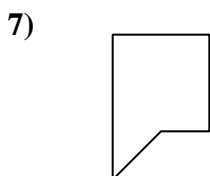
- A. triangle & heptagon
- B. quadrilateral & hexagon
- C. rectangle & quadrilateral
- D. octagon & triangle



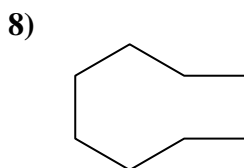
- A. pentagon & square
- B. pentagon & rectangle
- C. octagon & quadrilateral
- D. rectangle & triangle



- A. quadrilateral & rectangle
- B. triangle & octagon
- C. triangle & triangle
- D. hexagon & heptagon



- A. rectangle & triangle
- B. pentagon & octagon
- C. rectangle & heptagon
- D. pentagon & hexagon



- A. square & pentagon
- B. quadrilateral & rectangle
- C. pentagon & rectangle
- D. rectangle & hexagon

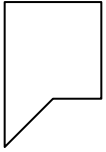
- 1. **C**
- 2. **C**
- 3. **B**
- 4. **B**
- 5. **D**
- 6. **C**
- 7. **A**
- 8. **D**



Determine which letter BEST represents the shapes that were used to create the figure shown.

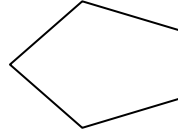
Answers

1)



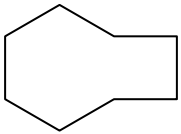
- A. rectangle & triangle
- B. pentagon & octagon
- C. triangle & heptagon
- D. square & heptagon

2)



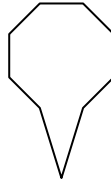
- A. hexagon & octagon
- B. pentagon & heptagon
- C. quadrilateral & triangle
- D. octagon & quadrilateral

3)



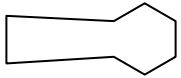
- A. octagon & heptagon
- B. pentagon & triangle
- C. hexagon & square
- D. triangle & rectangle

4)



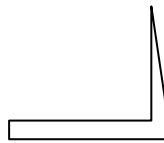
- A. square & hexagon
- B. triangle & heptagon
- C. triangle & octagon
- D. hexagon & octagon

5)



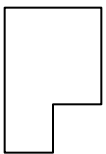
- A. heptagon & hexagon
- B. pentagon & square
- C. rectangle & heptagon
- D. quadrilateral & hexagon

6)



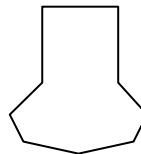
- A. quadrilateral & triangle
- B. heptagon & octagon
- C. quadrilateral & rectangle
- D. hexagon & rectangle

7)



- A. octagon & square
- B. square & quadrilateral
- C. hexagon & triangle
- D. hexagon & heptagon

8)



- A. hexagon & heptagon
- B. square & heptagon
- C. hexagon & pentagon
- D. triangle & octagon

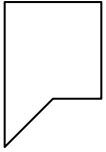
- 1. _____
- 2. _____
- 3. _____
- 4. _____
- 5. _____
- 6. _____
- 7. _____
- 8. _____



Determine which letter **BEST** represents the shapes that were used to create the figure shown.

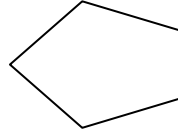
Answers

1)



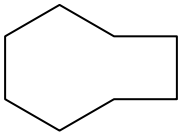
- A. rectangle & triangle
- B. pentagon & octagon
- C. triangle & heptagon
- D. square & heptagon

2)



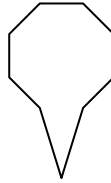
- A. hexagon & octagon
- B. pentagon & heptagon
- C. quadrilateral & triangle
- D. octagon & quadrilateral

3)



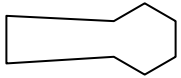
- A. octagon & heptagon
- B. pentagon & triangle
- C. hexagon & square
- D. triangle & rectangle

4)



- A. square & hexagon
- B. triangle & heptagon
- C. triangle & octagon
- D. hexagon & octagon

5)



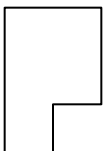
- A. heptagon & hexagon
- B. pentagon & square
- C. rectangle & heptagon
- D. quadrilateral & hexagon

6)



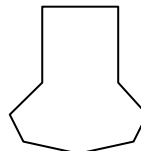
- A. quadrilateral & triangle
- B. heptagon & octagon
- C. quadrilateral & rectangle
- D. hexagon & rectangle

7)



- A. octagon & square
- B. square & quadrilateral
- C. hexagon & triangle
- D. hexagon & heptagon

8)



- A. hexagon & heptagon
- B. square & heptagon
- C. hexagon & pentagon
- D. triangle & octagon

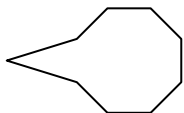
- 1. **A**
- 2. **C**
- 3. **C**
- 4. **C**
- 5. **D**
- 6. **A**
- 7. **B**
- 8. **B**



Determine which letter BEST represents the shapes that were used to create the figure shown.

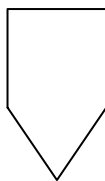
Answers

1)



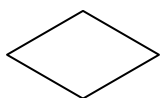
- A. rectangle & triangle
- B. triangle & octagon
- C. hexagon & rectangle
- D. quadrilateral & octagon

2)



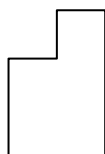
- A. hexagon & octagon
- B. heptagon & hexagon
- C. quadrilateral & triangle
- D. pentagon & triangle

3)



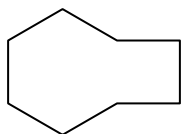
- A. square & triangle
- B. triangle & triangle
- C. square & pentagon
- D. rectangle & square

4)



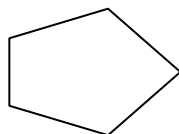
- A. rectangle & triangle
- B. quadrilateral & pentagon
- C. square & square
- D. triangle & quadrilateral

5)



- A. rectangle & quadrilateral
- B. quadrilateral & hexagon
- C. pentagon & rectangle
- D. octagon & square

6)



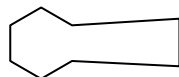
- A. rectangle & square
- B. hexagon & triangle
- C. pentagon & hexagon
- D. quadrilateral & triangle

7)



- A. octagon & pentagon
- B. octagon & square
- C. quadrilateral & heptagon
- D. rectangle & triangle

8)



- A. quadrilateral & hexagon
- B. square & triangle
- C. quadrilateral & pentagon
- D. heptagon & triangle

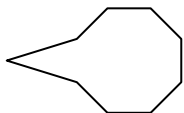
- 1. _____
- 2. _____
- 3. _____
- 4. _____
- 5. _____
- 6. _____
- 7. _____
- 8. _____



Determine which letter BEST represents the shapes that were used to create the figure shown.

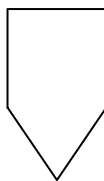
Answers

1)



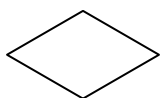
- A. rectangle & triangle
- B. triangle & octagon
- C. hexagon & rectangle
- D. quadrilateral & octagon

2)



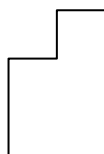
- A. hexagon & octagon
- B. heptagon & hexagon
- C. quadrilateral & triangle
- D. pentagon & triangle

3)



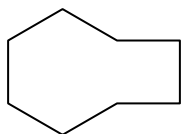
- A. square & triangle
- B. triangle & triangle
- C. square & pentagon
- D. rectangle & square

4)



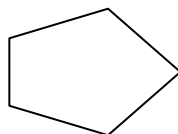
- A. rectangle & triangle
- B. quadrilateral & pentagon
- C. square & square
- D. triangle & quadrilateral

5)



- A. rectangle & quadrilateral
- B. quadrilateral & hexagon
- C. pentagon & rectangle
- D. octagon & square

6)



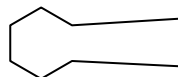
- A. rectangle & square
- B. hexagon & triangle
- C. pentagon & hexagon
- D. quadrilateral & triangle

7)



- A. octagon & pentagon
- B. octagon & square
- C. quadrilateral & heptagon
- D. rectangle & triangle

8)



- A. quadrilateral & hexagon
- B. square & triangle
- C. quadrilateral & pentagon
- D. heptagon & triangle

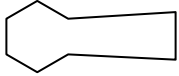
- 1. **B**
- 2. **C**
- 3. **B**
- 4. **C**
- 5. **B**
- 6. **D**
- 7. **D**
- 8. **A**



Determine which letter BEST represents the shapes that were used to create the figure shown.

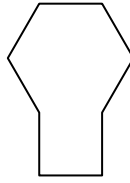
Answers

1)



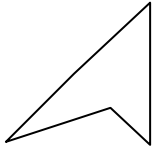
- A. pentagon & triangle
- B. quadrilateral & hexagon
- C. hexagon & octagon
- D. rectangle & hexagon

2)



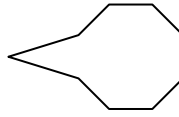
- A. octagon & heptagon
- B. rectangle & hexagon
- C. pentagon & hexagon
- D. quadrilateral & square

3)



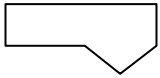
- A. octagon & square
- B. triangle & quadrilateral
- C. triangle & triangle
- D. rectangle & square

4)



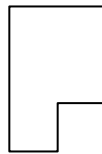
- A. square & heptagon
- B. triangle & heptagon
- C. pentagon & rectangle
- D. triangle & octagon

5)



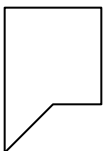
- A. quadrilateral & hexagon
- B. rectangle & triangle
- C. hexagon & square
- D. octagon & triangle

6)



- A. octagon & square
- B. quadrilateral & quadrilateral
- C. triangle & octagon
- D. rectangle & pentagon

7)



- A. rectangle & square
- B. quadrilateral & triangle
- C. quadrilateral & hexagon
- D. heptagon & quadrilateral

8)



- A. triangle & rectangle
- B. rectangle & quadrilateral
- C. quadrilateral & pentagon
- D. hexagon & rectangle

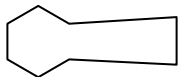
- 1. _____
- 2. _____
- 3. _____
- 4. _____
- 5. _____
- 6. _____
- 7. _____
- 8. _____



Determine which letter BEST represents the shapes that were used to create the figure shown.

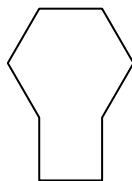
Answers

1)



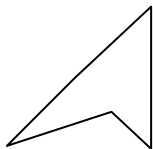
- A. pentagon & triangle
- B. quadrilateral & hexagon
- C. hexagon & octagon
- D. rectangle & hexagon

2)



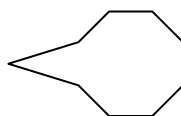
- A. octagon & heptagon
- B. rectangle & hexagon
- C. pentagon & hexagon
- D. quadrilateral & square

3)



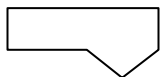
- A. octagon & square
- B. triangle & quadrilateral
- C. triangle & triangle
- D. rectangle & square

4)



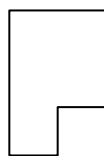
- A. square & heptagon
- B. triangle & heptagon
- C. pentagon & rectangle
- D. triangle & octagon

5)



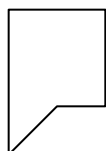
- A. quadrilateral & hexagon
- B. rectangle & triangle
- C. hexagon & square
- D. octagon & triangle

6)



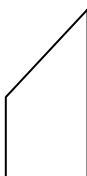
- A. octagon & square
- B. quadrilateral & quadrilateral
- C. triangle & octagon
- D. rectangle & pentagon

7)



- A. rectangle & square
- B. quadrilateral & triangle
- C. quadrilateral & hexagon
- D. heptagon & quadrilateral

8)



- A. triangle & rectangle
- B. rectangle & quadrilateral
- C. quadrilateral & pentagon
- D. hexagon & rectangle

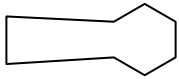
- 1. **B**
- 2. **B**
- 3. **C**
- 4. **D**
- 5. **B**
- 6. **B**
- 7. **B**
- 8. **A**



Determine which letter BEST represents the shapes that were used to create the figure shown.

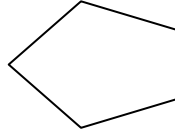
Answers

1)



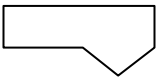
- A. pentagon & heptagon
- B. triangle & quadrilateral
- C. quadrilateral & hexagon
- D. triangle & octagon

2)



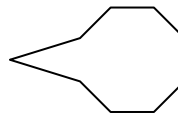
- A. octagon & square
- B. square & pentagon
- C. triangle & octagon
- D. quadrilateral & triangle

3)



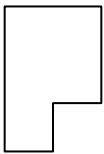
- A. quadrilateral & rectangle
- B. octagon & square
- C. hexagon & triangle
- D. quadrilateral & triangle

4)



- A. pentagon & square
- B. rectangle & triangle
- C. octagon & quadrilateral
- D. triangle & octagon

5)



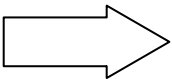
- A. square & pentagon
- B. heptagon & square
- C. quadrilateral & quadrilateral
- D. quadrilateral & heptagon

6)



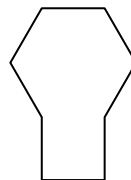
- A. triangle & rectangle
- B. pentagon & octagon
- C. hexagon & pentagon
- D. octagon & square

7)



- A. heptagon & triangle
- B. triangle & quadrilateral
- C. rectangle & hexagon
- D. square & rectangle

8)



- A. rectangle & pentagon
- B. rectangle & hexagon
- C. heptagon & triangle
- D. rectangle & octagon

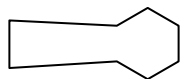
- 1. _____
- 2. _____
- 3. _____
- 4. _____
- 5. _____
- 6. _____
- 7. _____
- 8. _____



Determine which letter BEST represents the shapes that were used to create the figure shown.

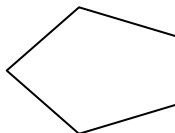
Answers

1)



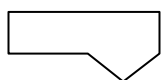
- A. pentagon & heptagon
- B. triangle & quadrilateral
- C. quadrilateral & hexagon
- D. triangle & octagon

2)



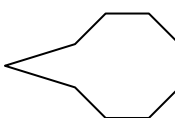
- A. octagon & square
- B. square & pentagon
- C. triangle & octagon
- D. quadrilateral & triangle

3)



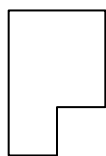
- A. quadrilateral & rectangle
- B. octagon & square
- C. hexagon & triangle
- D. quadrilateral & triangle

4)



- A. pentagon & square
- B. rectangle & triangle
- C. octagon & quadrilateral
- D. triangle & octagon

5)



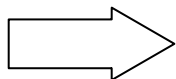
- A. square & pentagon
- B. heptagon & square
- C. quadrilateral & quadrilateral
- D. quadrilateral & heptagon

6)



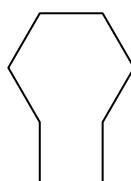
- A. triangle & rectangle
- B. pentagon & octagon
- C. hexagon & pentagon
- D. octagon & square

7)



- A. heptagon & triangle
- B. triangle & quadrilateral
- C. rectangle & hexagon
- D. square & rectangle

8)



- A. rectangle & pentagon
- B. rectangle & hexagon
- C. heptagon & triangle
- D. rectangle & octagon

- 1. **C**
- 2. **D**
- 3. **D**
- 4. **D**
- 5. **C**
- 6. **A**
- 7. **B**
- 8. **B**



Determine which letter BEST represents the shapes that were used to create the figure shown.

Answers

1)



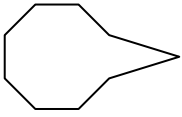
- A. pentagon & quadrilateral
- B. quadrilateral & octagon
- C. rectangle & triangle
- D. heptagon & pentagon

2)



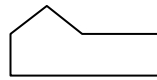
- A. triangle & rectangle
- B. octagon & heptagon
- C. pentagon & square
- D. pentagon & heptagon

3)



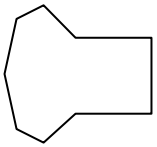
- A. triangle & octagon
- B. triangle & rectangle
- C. hexagon & triangle
- D. octagon & hexagon

4)



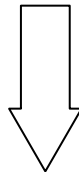
- A. heptagon & quadrilateral
- B. rectangle & pentagon
- C. octagon & pentagon
- D. quadrilateral & triangle

5)



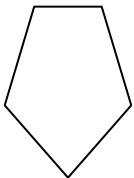
- A. rectangle & hexagon
- B. square & heptagon
- C. hexagon & square
- D. pentagon & triangle

6)



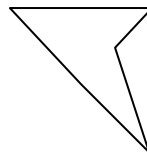
- A. pentagon & octagon
- B. hexagon & triangle
- C. triangle & rectangle
- D. octagon & hexagon

7)



- A. octagon & rectangle
- B. square & pentagon
- C. square & hexagon
- D. quadrilateral & triangle

8)



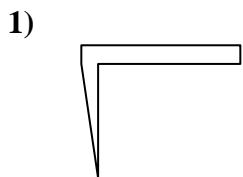
- A. square & hexagon
- B. rectangle & heptagon
- C. triangle & triangle
- D. square & triangle

- 1. _____
- 2. _____
- 3. _____
- 4. _____
- 5. _____
- 6. _____
- 7. _____
- 8. _____

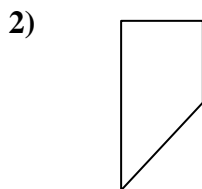


Determine which letter BEST represents the shapes that were used to create the figure shown.

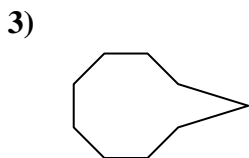
Answers



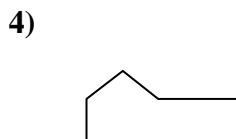
- A. pentagon & quadrilateral
- B. quadrilateral & octagon
- C. rectangle & triangle
- D. heptagon & pentagon



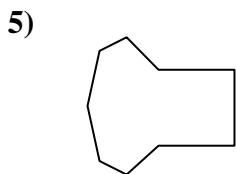
- A. triangle & rectangle
- B. octagon & heptagon
- C. pentagon & square
- D. pentagon & heptagon



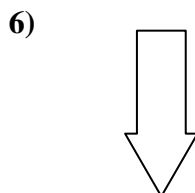
- A. triangle & octagon
- B. triangle & rectangle
- C. hexagon & triangle
- D. octagon & hexagon



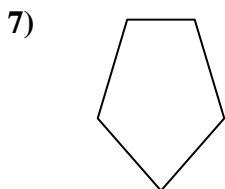
- A. heptagon & quadrilateral
- B. rectangle & pentagon
- C. octagon & pentagon
- D. quadrilateral & triangle



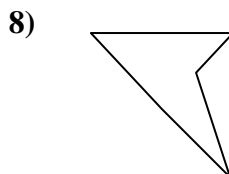
- A. rectangle & hexagon
- B. square & heptagon
- C. hexagon & square
- D. pentagon & triangle



- A. pentagon & octagon
- B. hexagon & triangle
- C. triangle & rectangle
- D. octagon & hexagon



- A. octagon & rectangle
- B. square & pentagon
- C. square & hexagon
- D. quadrilateral & triangle



- A. square & hexagon
- B. rectangle & heptagon
- C. triangle & triangle
- D. square & triangle

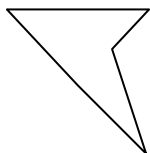
- 1. **C**
- 2. **A**
- 3. **A**
- 4. **D**
- 5. **B**
- 6. **C**
- 7. **D**
- 8. **C**



Determine which letter BEST represents the shapes that were used to create the figure shown.

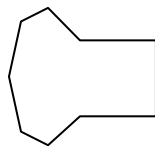
Answers

1)



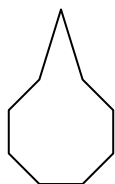
- A. triangle & triangle
- B. octagon & rectangle
- C. pentagon & heptagon
- D. hexagon & triangle

2)



- A. rectangle & heptagon
- B. square & quadrilateral
- C. triangle & quadrilateral
- D. heptagon & hexagon

3)



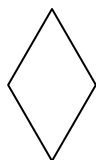
- A. octagon & pentagon
- B. rectangle & heptagon
- C. triangle & octagon
- D. heptagon & hexagon

4)



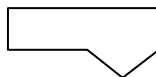
- A. hexagon & rectangle
- B. quadrilateral & hexagon
- C. heptagon & rectangle
- D. quadrilateral & square

5)



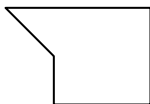
- A. pentagon & rectangle
- B. hexagon & square
- C. octagon & quadrilateral
- D. triangle & triangle

6)



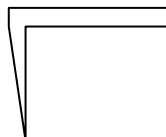
- A. square & rectangle
- B. rectangle & heptagon
- C. pentagon & rectangle
- D. quadrilateral & triangle

7)



- A. pentagon & octagon
- B. hexagon & heptagon
- C. heptagon & octagon
- D. square & triangle

8)



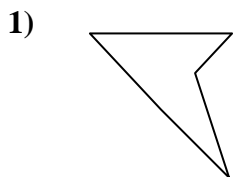
- A. rectangle & triangle
- B. octagon & hexagon
- C. pentagon & rectangle
- D. hexagon & triangle

- 1. _____
- 2. _____
- 3. _____
- 4. _____
- 5. _____
- 6. _____
- 7. _____
- 8. _____

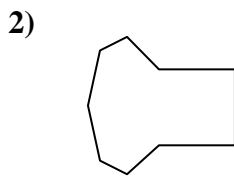


Determine which letter BEST represents the shapes that were used to create the figure shown.

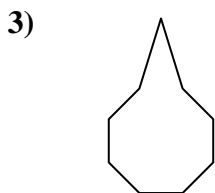
Answers



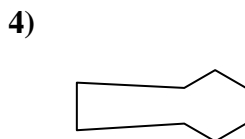
- A. triangle & triangle
- B. octagon & rectangle
- C. pentagon & heptagon
- D. hexagon & triangle



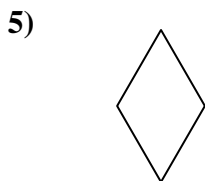
- A. rectangle & heptagon
- B. square & quadrilateral
- C. triangle & quadrilateral
- D. heptagon & hexagon



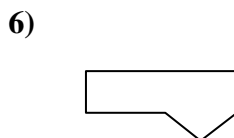
- A. octagon & pentagon
- B. rectangle & heptagon
- C. triangle & octagon
- D. heptagon & hexagon



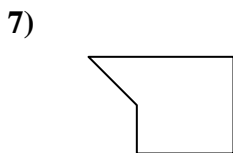
- A. hexagon & rectangle
- B. quadrilateral & hexagon
- C. heptagon & rectangle
- D. quadrilateral & square



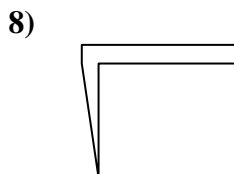
- A. pentagon & rectangle
- B. hexagon & square
- C. octagon & quadrilateral
- D. triangle & triangle



- A. square & rectangle
- B. rectangle & heptagon
- C. pentagon & rectangle
- D. quadrilateral & triangle



- A. pentagon & octagon
- B. hexagon & heptagon
- C. heptagon & octagon
- D. square & triangle



- A. rectangle & triangle
- B. octagon & hexagon
- C. pentagon & rectangle
- D. hexagon & triangle

- 1. **A**
- 2. **A**
- 3. **C**
- 4. **B**
- 5. **D**
- 6. **D**
- 7. **D**
- 8. **A**